




26 Tangram



¿Qué figura tiene?

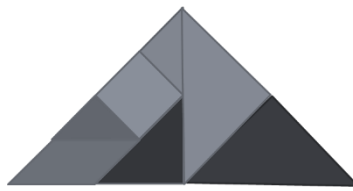

¡Vamos a Jugar con tangram!

a) Cuadrado

b) Rectángulo

c) Triángulo rectángulo isósceles

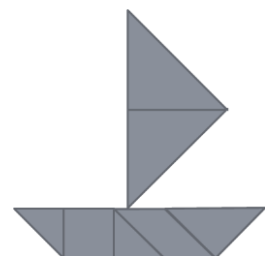
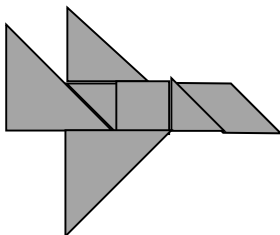

d) Paralelogramo



e) avión

f) pato

c) barco



¿Qué forma podemos armar más?

